




# Overruled!

## Learner Guide



Watch the video, *Overruled!*, and complete these activities. The video and an instructor guide are available on iTunes U (search "Math Snacks") and at [mathsnacks.org](http://mathsnacks.org)

The official for the kingdom who is in charge of measuring made the following table comparing the number of teacher feet to student feet.

Student	Teacher
3	1
4	2
7	5

**1A. Is the official doing a good job? Why or why not?**

---



---



---

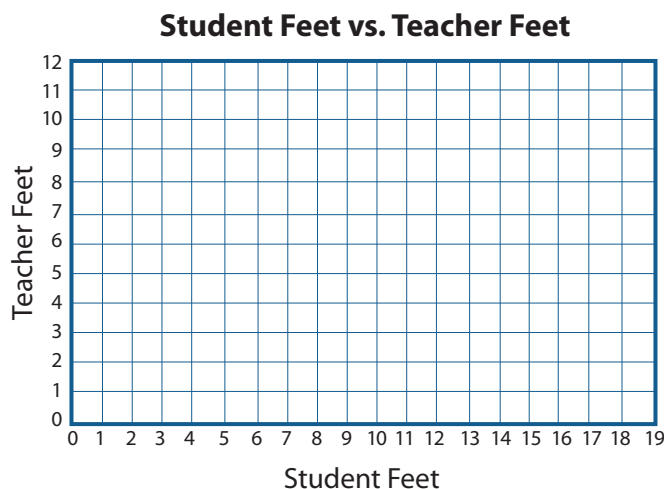
1 Teacher's Foot      2 Student's Feet



**B. If the official was doing his job correctly, what would the table look like?**

Student	Teacher

**C. Graph your table of foot measurements below.**



**D. How can you tell if someone is doing a good job of measuring feet?**

---



---



---



---



---



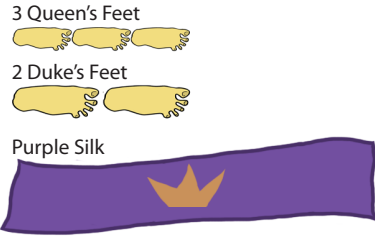
---



---

The queen decided that she wanted a new royal purple banner to fly over the new bridge.

2. The banner will require 6 queen's feet of purple silk fabric. By looking at the chart, can you tell how many duke's feet of silk will be needed for the banner?



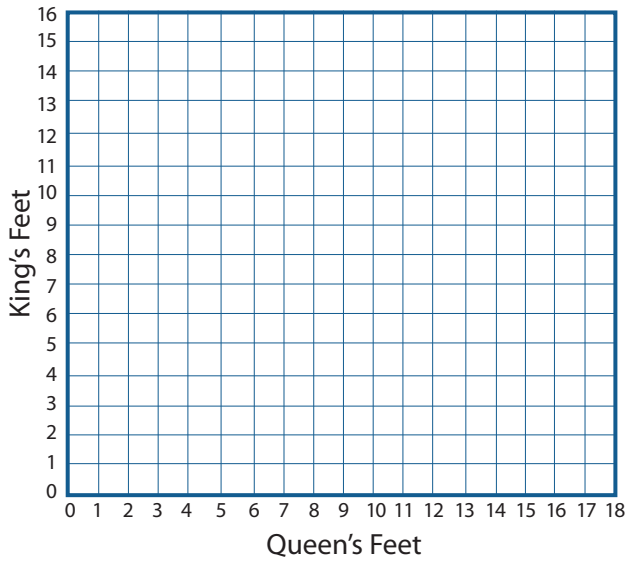
Queen's Feet	Duke's Feet
3	2
4	
6	

In the fictional kingdoms of Kingopolis and Queentopia, engineers had to convert king's feet to queen's feet, and vice versa, to build a bridge between the two countries. They had to know that 2 queen's feet = 3 king's feet.

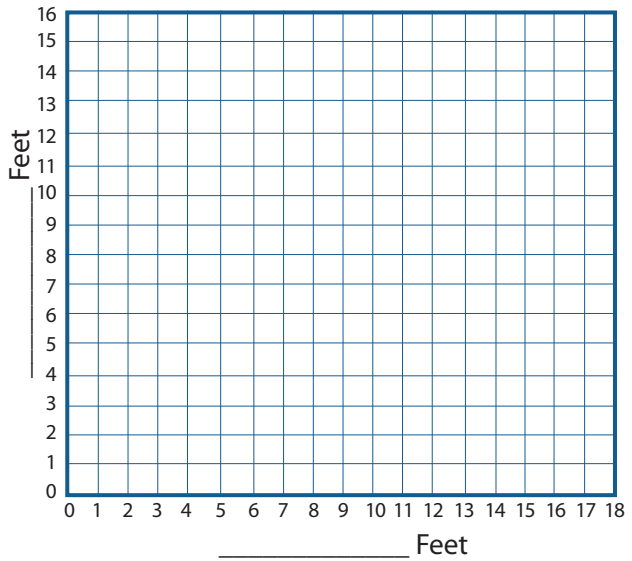


3. Fill in the graphs and charts so that people in the two kingdoms can easily convert one form of measurement to the other.

Queentopia



Kingopolis



Queen's Feet

A. King's Feet

1	
2	3
3	
4	6
5	
10	

King's Feet

B. Queen's Feet

1	
2	
3	2
4	
5	
10	